











Name:

## Calculating change from £10

AC 3.1

If you buy the following items using the money shown, how much change should you be given?

| Money   | Items bought  | Change given           |
|---|---|------------------------|
|    |  £4.68   | £ <input type="text"/> |
|   |  £8.79  | £ <input type="text"/> |
|  |  £6.25 | £ <input type="text"/> |
|  |  £3.85 | £ <input type="text"/> |
|  |  £9.65 | £ <input type="text"/> |