

Name:

## 3D shapes

AC 1.2

Using the following:

**Cube**    **Cuboid**    **Cylinder**    **Sphere**    **Triangular Prism**  
**Triangular-Based Pyramid**    **Square-Based Pyramid**

write the correct name of each shape in the space provided.

You may use each name **more than once**.

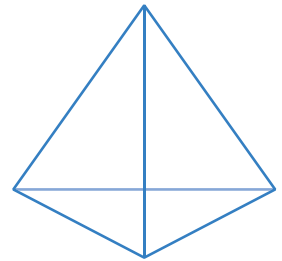
a)



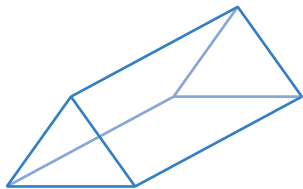

b)



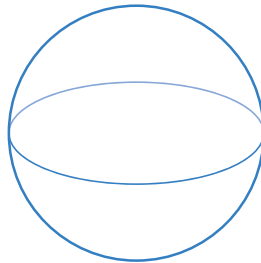

c)



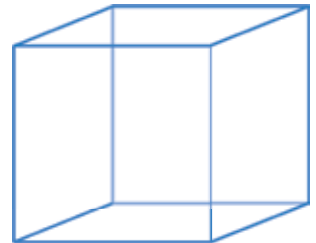

d)



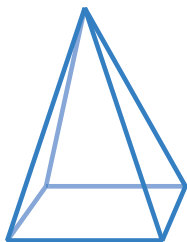

e)





f)




g)




h)




i)

